

**SRI GURU NANAK PUBLIC SCHOOL
HOLIDAYS HOMEWORK (2023-24)
CLASS III**

ENGLISH

- ROLL-NO.- 1 TO 25 - PREPARE AN ATTRACTIVE AND UNIQUE BROCHURE for the TRANSPORTATION SYSTEM USED WITHIN LAKSHADWEEP ISLANDS.
- ROLL-NO.- 26 TO 46 – PREPARE A BEAUTIFUL AND COLOURFUL COLLAGE on A3 SIZE SHEET SHOWING THE HISTORY OF MEANS OF COMMUNICATION USED IN ANDAMAN AND NICOBAR ISLANDS.
- READ ANY STORY BOOK OF YOUR CHOICE , PREPARE A COVER PAGE FOR THAT STORY BOOK ON A3 SIZE SHEET AND WRITE THE SUMMARY OF THAT STORY BOOK ON THAT SAME SHEET.
- WRITE TWO DIFFICULT WORDS DAILY IN YOUR ENGLISH HOMEWORK NOTEBOOK ALONG WITH THEIR MEANINGS AND ALSO FRAME SENTENCES . (ATLEAST TWENTY WORDS)

PRACTICE ONE PAGE OF CURSIVE WRITING DAILY IN A SEPARATE NOTEBOOK.

- DRAW OR COLLECT AT LEAST SIX COMMON PICTURES (EXAMPLE FLOWER, ANY CARTOON, CAR) AND COLOUR THEM BEAUTIFULLY.
TRY TO COMPOSE 3 SMALL POEMS BASED ON EACH OF THE PICTURE YOU HAVE DRAWN/PASTED ON ANY A4 SIZE SHEET.(USE RHYMING WORDS, POEM CAN BE OF 4 LINES.)

WRITE A SELF COMPOSED POEM ON FATHER'S DAY WHICH IS ON 18 JUNE 2023 ON A4 SIZE SHEET.

PRACTICE THE FOLLOWING WORKSHEET IN ENGLISH HOMEWORK NOTEBOOK.

Q1-Recognize the nouns in the following sentences , change their gender and rewrite the sentences.

1. The lioness was ready to pounce.
2. The actor acted quite well in the movie.
3. My uncle lives in New York.
4. My father works in a government office.
5. The gentleman gave me this chocolate.
6. The king ruled with sincerity.
7. She was the duchess of Stanford.
8. The waiter brought us our food.
9. The prince succeeded his father.
10. The cock started calling at the break of dawn.

Q2- Write the plural form of the following nouns.

1. city -
2. house -
3. boy -
4. family -
5. life -
6. photo -
7. phone -
8. sandwich -
9. nurse -
10. elf -
11. phenomenon -
12. criterion -
13. village -
14. toy -

HINDI

ग्रीष्मवकाश गृहकार्य
कक्षा - तृतीय
सत्र - 2023-2024

- प्रतिदिन एक सुलेख करे ।
- अपने प्रिय कार्टून का चित्र बनाकर उसके विषय में कुछ वाक्य लिखें ।
 - कोई 10 तुकान्त शब्द लिखो ।
- पुस्तक विभा के पाठ 3 व 4 पढ़े और उनके शब्द अर्थ याद करे ।

PUNJABI

1. Practice daily **ੳ ਤੇ ਵ** (5times).
2. Chart of **ੳ ਤੇ ਵ** with Pictures.

MATHS

1. Complete the Worksheets of chapter - 1, 2 and 3 in the homework notebook. (Worksheet attached in the end)
2. Project work: Be Innovative while doing the work.

CHAPTER – 1 LOOKING BACK

Q.1 Write in numerals and words –



a) In numerals - _____

b) In words - _____

Q.2 Have a you at the riddle below –

- I am a 3 -digit number
- My hundreds digit is odd

328	412	760
674	992	585
88	671	289

- My tens digit is more than 6
- I am an even number
- Who am I?

Q.3 Fill in the blanks –

a) 60 tens = ____ hundreds

b) ____ hundreds = 700 ones

c) 30 tens = ____ ones

Q.4 Write the standard form –

a) 3 tens 8 hundreds 0 ones - _____

b) 4 ones 1 hundred 7 tens - _____

Q.5 Arrange the following numbers in increasing order –

812 , 990 , 101 , 72 , 909 , 821

Q.6 Arrange the following numbers in decreasing order –

302 , 251 , 320 , 519 , 421 , 606

Q.7 Circle the number with 7 in tens place –

721, 172 , 907 , 470 , 771 , 127

Q.8 Write the standard form and the expanded form-

Number Name	Standard form	Expanded form
Eight hundred nine		
Three hundred ten		

Q.9 Tick ✓ the largest and circle the smallest number –

689 , 520 , 357 , 742 , 798 , 250 , 120

Q.10 Use the digits 4 , 0 , 5 to form all possible 3 – digit numbers. Arrange these numbers in ascending and descending orders,

Q.11 Complete the following sentences –

a) The number that comes in between 728 and 730 is _____

b) The expanded form of _____ is $500 + 9$.

c) 999 is _____ than 998.

Q.12 What is the successor of the product of the place value of 3 in 835 and the face value of 2 in 284?

Q.13 Form the smallest and the greatest number from the given digits –

Digits	Smallest Number	Greatest Number
3, 7, 2		
4, 0, 8		

Q.14 Circle the correct answer

- | | | |
|--------------------------------|-----|-----|
| a) 3 hundreds + 2 ones | 320 | 302 |
| b) The place value of 5 in 753 | 50 | 5 |
| c) $300 + 20 + 7$ | 372 | 327 |

CHAPTER – 2 -- 4-DIGIT NUMBERS

Q.1 The numbers are written in expanded or short form. Complete the table -

Short Form	Expanded Form
6785	
	$4000 + 200 + 6$
5071	

Q.2 Write the face value, place, and place value of the Underlined digit. The first one has been done for you.

Number	Face value	Place	Place value
<u>3</u> 745	4	tens	40
4 <u>0</u> 38			
<u>1</u> 987			

Q.3 Find the number whose digit at the

- a) tens place is 7
- b) thousands place is 4 less than 10
- c) hundreds place is between 3 and 5
- d) ones place is 2 more than 6.

Q.4 Write the predecessor and successor of the smallest 4-digit number.

Q.5 Write the largest 4-digit number using the digits 5, 9, 7, 8. Also find the difference between face value of the digit at thousands place and units place.

Q.6 Find the difference between the place value of 5 and 1 in the number 3451.

Q.7 Fill in the blanks –

- a) The _____ of a digit in the numeral is the value of the digit itself at whatever place it may be.
- b) How many tens are there in a thousand? _____
- c) The place value of _____ is always 0 irrespective of its place.

Q.8 Complete the following patterns –

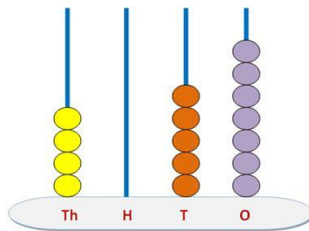
- a) 1381, _____, 1581, 1681, _____, 1881
- b) 1721, 1621, 1521, _____, _____, _____

Q.9 Write the correct symbol $>$, $<$ or $=$

a) $9999 - 1000$ _____ 8000 b) $6000 + 1100$ _____ 7100

c) 9267 _____ 9276

Q.10 Write the number and the number name shown by the abacus –



Q.11 Form the greatest and smallest 4-digit numbers using the digits 9,1,0 and 5 each only once.

Q.12 Arrange 1429, 1942, 1249 and 1492 in ascending order.

Q.13 Find the product of the place value and face value of 7 in 4372.

CHAPTER – 3 ADDITION

Q.1 Add the following –

a) $123 + 4321 + 91$

b) $388 + 2188 + 8$

Q.2 Write the missing numbers in each box to get the number written on the top.

5749
$5739 + \underline{\hspace{2cm}}$
$\underline{\hspace{2cm}} + 100$
$4749 + \underline{\hspace{2cm}}$

Q.3 Using the following properties of addition, fill in the blanks-

a) $\underline{\hspace{2cm}} + 0 = 1357$

b) $1739 + \underline{\hspace{2cm}} = 500 + 1739$

Q.4 A postman delivered 2537 letters in the month of March and 3275 letters in the month of April. How many letters are delivered in total in the two months?

Q.5 Add -

6 thousand 2 tens 5 ones + 2 thousands 9 hundreds 7 tens 7 ones

Q.6 Find the sum of all even numbers between 1320 to 1330.

Q.7 Using the digits 4, 1, 5, 0 write the largest and the smallest numbers and find their sum.

Q.8 Find the sum of the greatest 3- digit number and the smallest 4-digit number.

Q.9 In a garden there are 2383 mango trees, 4019 banana trees and 1825 coconut trees. How many trees in total are there in the garden?

'Trees play an important role in our life'.

Do you agree? Why? (Value Corner)

Q.10 Add down. Then add up.

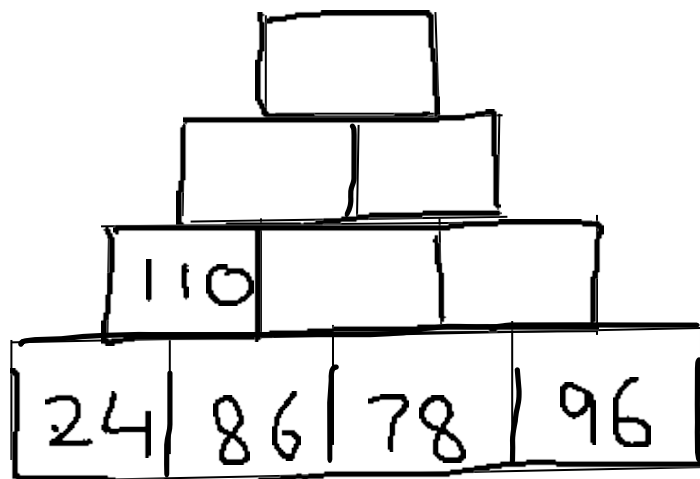
$$\begin{array}{r} 4 \\ 7 \\ + 2 \\ \hline \\ \hline \end{array}$$

A handwritten curly brace groups the numbers 4 and 7, with an orange circle to its right.

$$\begin{array}{r} 4 \\ 7 \\ + 2 \\ \hline \\ \hline \end{array}$$

A handwritten curly brace groups the numbers 7 and 2, with a green circle to its right.

Q.11 Complete the addition towers



Q.12 In a school, 1845 students travel by car, 3485 travel by school bus and 1235 walk to the school. How many students are there in the school?

Q.13 A florist has 1254 roses and 1575 marigold flowers. Find the total number of flowers in his shop.

ART INTEGRATED PROJECT

ROLL NO. 1 to 25

Plan a virtual tour to Lakshadweep from Delhi. Note the important places to reach Lakshadweep to Delhi. Write possible transport which can be used to reach Lakshadweep from Delhi. Write their distance in relation to mode of transport. Represent your findings (Distance/time taken) in a comparison tables and also add the stopper. Paste appropriate pictures of tour and island also.

ROLL 26 Onwards

Plan a virtual tour to Andaman and Nicobar from Delhi. Note the important places to reach Andaman and Nicobar to Delhi. Write possible transport which can be used to reach Andaman and Nicobar from Delhi. Write their distance in relation to mode of transport. Represent your findings (Distance/time taken) in a comparison tables. Paste appropriate pictures of tour and island also.

SCIENCE

1. Learn and revise all the chapters done till now.

2. Make a project on topics given below

- Mode of transport in Lakshadweep (Roll no 1-25)
- Mode of transport in Andaman and Nicobar Islands. (Roll no 26 onwards)

3. Complete the worksheet given below in your science homework notebook.

Q1. Learn the traffic signs and draw the pictures of given traffic signs:

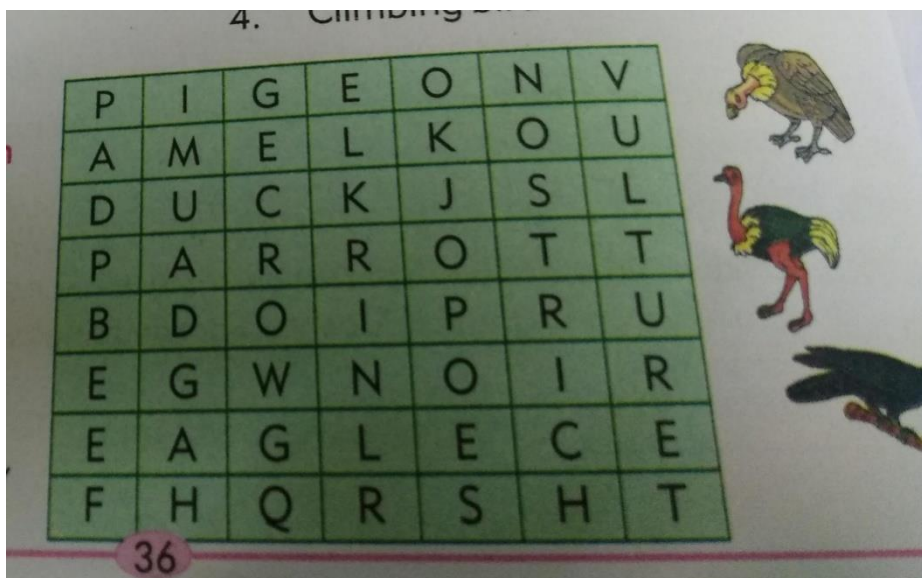
1. Zebra crossing.

2. One way

3. No parking

4. U- Turn

Q2. Find the name of different birds given in the word grid.



Q3. Draw pictures of these organs. Label them and colour them beautifully:


- 1. Kidney
- 2. Lungs

Q4. Observe any five animals living around you and note their eating habits in the following table:

Animal's name	What it eats?	How it moves

Q5.

Circle the living things.



Draw a living thing.

Draw a non-living thing.

Q6. Write two examples of each:

1. **Strong and hooked beak.....**
2. **Sharp, strong and pointed beak.....**
3. **Hooked beak.....**
4. **Short, hard and horny beak.....**
5. **Broad and flat beak.....**
6. **Broad and short beak.....**

SOCIAL SCIENCE

*Do the following holidays homework according to your roll number.

*Roll no. 1 to 15 - Make a poster on uses of water.

*Roll no. 16 to 30 - Prepare a collage on different types of clothes we wear in different seasons.

*Roll no. 31 onwards Make poster on do's and don'ts for safety at home, at school, on road

*Paste solved mock test in class work notebook.

* Do and paste given worksheet in homework notebook

Art integrated project

*R. No. 1 to 25 - Prepare a collage on different means of transport of Andaman and Nicobar Islands.



*R. No. 26 onwards - Prepare a collage of old means of communication in Andaman and Nicobar Islands.

* BE INNOVATIVE WHILE DOING THE WORK.

WORKSHEET

SUBJECT: SOCIAL SCIENCE

Q 1 Identify the following famous personalities :-



Q B Fill in the blanks :-

1. _____ transport is the fastest means of transport.
2. _____ is a port city.
3. Aircrafts take off and land at the airport also called an _____.
4. Vehicles that are used by everyone are called _____ transport vehicles.
5. _____ was the first woman of Indian Origin to fly in space.

Q C Name the followings :-

1. Two Private vehicles _____

2. Two means of Air transport _____

3. Two Public transport vehicles _____

4. Two vehicles used in villages _____

G.K.

- Read newspaper daily and write two current affairs in a small notebook.

DIVINITY

- Draw Khanda and write its importance on A4 size coloured sheet.

COMPUTER

1. READ CH-2 – INTRODUCTION TO WINDOWS 10 FROM BOOK.

2. QUESTIONS TO BE DONE IN COMPUTER NOTEBOOK.

Q1. WRITE 5 INPUT DEVICES.

Q2. WRITE 5 OUTPUT DEVICES.

Q3. WRITE 5 STORAGE DEVICES.

Q4. WRITE 5 HARWARE DEVICES.

Q5. WRITE 5 APPLICATION SOFTWARES.

ART

- Topics to be drawn in your sketch book
 1. Grow more Trees
 2. Beach side drawing
 3. Save water
- In book Kids Care do pg no. 12,18,19,20
- Project
 1. Decorate a pot with shells (R. No. 1 - 25)
 2. Sea shell wall hanging (R.no. 26 onwards)

